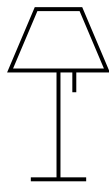

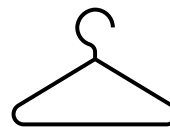








NOMBRE	DÍA	MES	AÑO

EJERCICIO DE RECONOCIMIENTO

Señale todos los animales



NOMBRE	DÍA	MES	AÑO

EJERCICIO DE CÁLCULO

Ponga los resultados correctos a las sumas y restas

$3+2=$

$4+4=$

$7+4=$

$7+3=$

$9-1=$

$7+2=$

$4+2=$

$8+1=$

$6+2=$

EJERCICIO DE ATENCIÓN







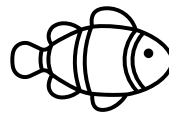

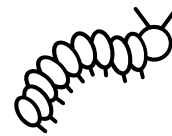
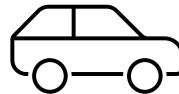



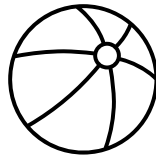


Señale todos los 5

38493475729857274987392898430293203923
40339849384903840394029403943058957285
08430973892379380238203823289273489374
98755845794579383985945840958305940090

NOMBRE	DÍA	MES	AÑO

EJERCICIO DE RECONOCIMIENTO

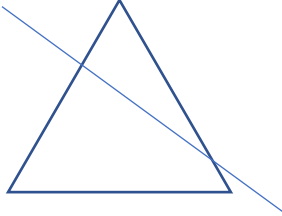
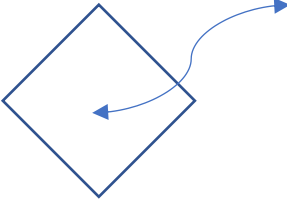

COLOREE TODOS LOS ANIMALES



NOMBRE	DÍA	MES	AÑO

EJERCICIO

COPIE LOS SIGUIENTES DIBUJOS

NOMBRE	DÍA	MES	AÑO

EJERCICIO DE ATENCIÓN Y RECONOCIMIENTO

SEÑALE TODOS LOS OBJETOS QUE HAY EN UNA COCINA



Municipios que componen la Mancomunidad 2016:



AJALVIR



**CAMARMA DE
ESTERUELAS**



COBEÑA



FRESNO DE TOROTE



**FUENTE EL SAZ
DE JARAMA**



**LOS SANTOS
DE LA HUMOSA**



RIBATEJADA



**TALAMANCA
DE JARAMA**



VALDEAVERO



**VALDEOLMOS/
ALALPARDO**



VALDEPIÉLAGOS



**VALDETORRES
DE JARAMA**